

Emergency Home Learning Package

Name: _____

This package is only to be completed in the event of a functional school closure (i.e. COVID protocol reasoning). Please only do the work in here if that is to happen—DO NOT complete otherwise.

Instructions: Complete each day's checklist by completing your choice of 2 activities for each subject. Once you have completed the activities, you must write down what you did on your checklist. Each day you must do 2 Language Arts activities, 2 Math activities, 2 Gym activities, and 1 other activity of your choice (Science, Social Studies, French, etc. Other options for additional activities can be found online on Ms. Bruce's website on the Emergency Home Learning tab. <https://obruce.opened.ca/emergency-home-learning/>

Home Learning Checklist

Name: _____

Complete the Home learning Checklist by filling in the 2 activities you did for each subject in that section.

	Day 1	Day 2	Day 3	Day 4	Day 5
Language Arts					
Math					
Gym					
1 Extra Activity					

Fictional Narrative

W	R	I	T	E
<p>Think of an animal that you would be if you had to be an animal. Write a story about changing places with that animal for a day.</p>	<p>Pretend you are transported to a different time. Write about your adventure in this different time period.</p>	<p>Many books have been written about living underground. Write a story about what life would be like if you lived underground.</p>	<p>Imagine you are at the park with friends when you discover a rusty old key. Write about what happens next.</p>	<p>Pretend you are stranded on a deserted tropical island. Write about your adventure on the island.</p>
<p>On a rainy day, you notice that your closet is a portal to another world. Write about your adventures in this other world.</p>	<p>Imagine you find a magic potion. You drink the magic potion, and you notice yourself changing. Write about what happens next.</p>	<p>While sitting in class, you hear a crash coming from the classroom library area. Write about what happens next.</p>	<p>You are at home alone when you notice what appears to be an alien spaceship crash into your backyard. Write about what happens next.</p>	<p>Cartoon characters are often children's favorite "friends" when growing up. Write a fantasy about spending the day with a cartoon character.</p>
<p>Some people say that everyone has a twin somewhere in the world. Write a story about meeting your "twin".</p>	<p>Many children and teenagers spend hours playing video games. Write a made up story about getting trapped in a video game.</p>	<p>You have a won a contest, and you can choose any school job (principal, teacher, etc.) to do for a day. Write a story about this day.</p>	<p>Imagine that tomorrow is going to be the perfect day. Write about this perfect day that you will have.</p>	<p>Pretend you stumbled upon an old wizard who granted you three wishes in exchange for helping him. Write about what happens next.</p>

Personal Narrative

W	R	I	T	E
<p>Write about a time something embarrassing happened to you.</p>	<p>Think about the best field trip you have ever had. Write about that day.</p>	<p>Think of a time when you achieved a personal goal. Write a story about how you met that goal.</p>	<p>Sometimes events don't turn out the way we want. Write about a time something did not go as you planned.</p>	<p>Write about a time when you were sad. Include details about what caused you to be sad and how you overcame that sadness.</p>
<p>Sometimes moments happen that we want to remember for a long time. Write about a memory that you want to remember.</p>	<p>It is important for people to feel proud of themselves. Write about a time you were proud of yourself.</p>	<p>Being a helper can be very rewarding. Write about a time you helped someone or were helped by someone.</p>	<p>Spending time with family and friends are some of the best times people have. Write about a time spent with a family member or a friend.</p>	<p>Think of a place you really enjoying going. Write about a specific memory from that place.</p>
<p>Some people love trying new things and some people do not. Write about a time you tried something new.</p>	<p>Everyone has been disappointed at some point in their lives. Write about a time you were disappointed.</p>	<p>People usually remember times when they got into trouble. Write about a time you were in trouble or you saw someone else get into trouble.</p>	<p>Think of a time you got hurt. Write about the events that led to you getting hurt and what happened after.</p>	<p>Some people give up when things get too difficult. Write about a time you were learning something new and did not give up.</p>

R	E	A	D	!
Read a short story out loud to someone in your home	Read a chapter in a novel	Read a full book on Epic Books	Read a magazine article (online or hard copy)	Read a news article about a current event
Finish a novel	Read a non-fiction book	Read a book written before you were born	Build a blanket fort and read a book inside	Listen to an audiobook
Retell a story you have read to someone in your house	Read a book out loud in a silly voice	FREE SPACE	Read a recipe (Bonus if you make the recipe)	Read the nutritional value on your favorite snack
Read a biography	Read a poem backwards	Read a fiction book	Read the instructions to something in your house	Read a poem
Reread your favorite book	Read a funny book	Read all of the lyrics to one song	Read a science book	Read a book with a flashlight (it needs to be dark or under a blanket)

Name: _____

D-7

Operations

Multi-
Step

Daily Word Problem

Violet bakes 7 dozen cookies.

She ate 2 cookies.

She gave 2 dozen cookies to her brother.

She gave 9 cookies to her mother.

How many cookies did Violet have left?

Show your work.



answer: _____

Name: _____

Daily Word Problem


There are 720 cars in a parking lot.

The table below shows the colors of the cars in the lot.

Cars in the Parking Lot	
white	276
blue	313
red	?
other colors	95

How many red cars are in the parking lot?

Show your work.



answer: _____

Name: _____

Perimeter Challenge

Denise works in a sign shop. She is making a hexagon-shaped sign for a store. Each side of the hexagon is the same length.

One side measures 18 inches.

Denise will attach a neon light tube along the edges of her sign.

How many inches of neon light tube will she need?

Show your work.



answer: _____

Name: _____


Perimeter Challenge

Haru has a rectangular wooden raft. He wants to put a rubber strip around the edge of the raft to make it more safe.

The length of the raft is 8 feet. The width is twice the length.

How many feet of rubber strip does Haru need?

Show your work.



answer: _____

Name: _____


Perimeter Challenge

The perimeter of an octagon is 168 centimeters.

Each side of the octagon is the same length.

What is the length of one side of the octagon?

Show your work.



answer: _____

Name: _____

Perimeter Challenge

Jess wants to place a stone border around her square garden.

The perimeter of the garden is 80 feet. What is the length of each side?

Show your work.



answer: _____

Name: _____

Perimeter Challenge


Francis is making a picture frame out of craft sticks.

To make the frame, he attaches 4 craft sticks, end to end, to make the right side. He uses another 4 craft sticks to make the right side.

Then he attaches 2 craft sticks, end-to-end, to make the top of the frame. He does the same for the bottom.

If each craft stick measures 4 inches, what is the perimeter of his picture frame?

Show your work.



answer: _____

Name: _____

Perimeter Challenge


Miss Rose lives in a rectangular house. She needs to replace the gutter along the roof.

The north side of the house measures 60 feet. The east side of the house measures 82 feet.

How many feet of gutter will she need for her house?

Show your work.

answer: _____



Name: _____

Perimeter Challenge

Mr. Diaz wants to put a fence around his rectangular-shaped yard.

The width of the yard is 65 feet. The length is 122 feet.

How many feet of fencing does Mr. Diaz need?

Show your work.

answer: _____



Name: _____

Perimeter Challenge


Sam is going to put wooden baseboard around a rectangular bedroom.

The length of the bedroom is 26 feet. The width is one half of the length.

How many feet of baseboard does Sam need?

Show your work.

answer: _____



Name: _____

Perimeter Challenge


Rectangle X has a length of 17 meters and a width of 9 meters.

Rectangle Y has a length of 17 meters and a width of 12 meters.

You place both rectangles side-by-side to create a new rectangle, Rectangle Z.

What is the perimeter of Rectangle Z?

Show your work.



answer: _____

Name: _____


Perimeter Challenge

A rectangular garden has a perimeter of 180 feet.

The north side of the garden is 40 feet.

What is the length of the east side of the garden?

Show your work.



answer: _____

Name: _____

D-10

Operations

Multi-Step

Daily Word Problem

Addison collects coins from the United States and Canada. She has 8 Canadian coins in her collection. She has four times as many U.S. coins. How many coins are in Addison's collection?

Show your work.



answer: _____

Name: _____

D-9

Operations

Single-
Step

Daily Word Problem

It is Khalid's great-grandma's birthday. She was born on this day, 105 years ago. In what year was Khalid's great-grandma born?

Show your work.




answer: _____

Name: _____

Daily Word Problem

Sofia has the following dollar bills and coins.



Asher has \$26 less than Sofia.

How much money does Asher have?

Show your work.

answer: _____



Name: _____

Multiplication Frenzy

$$\begin{array}{r} 0 \\ \times 2 \\ \hline \end{array} \quad \begin{array}{r} 11 \\ \times 2 \\ \hline \end{array} \quad \begin{array}{r} 6 \\ \times 5 \\ \hline \end{array} \quad \begin{array}{r} 0 \\ \times 3 \\ \hline \end{array} \quad \begin{array}{r} 8 \\ \times 4 \\ \hline \end{array} \quad \begin{array}{r} 6 \\ \times 8 \\ \hline \end{array} \quad \begin{array}{r} 9 \\ \times 3 \\ \hline \end{array} \quad \begin{array}{r} 2 \\ \times 4 \\ \hline \end{array} \quad \begin{array}{r} 12 \\ \times 3 \\ \hline \end{array} \quad \begin{array}{r} 10 \\ \times 4 \\ \hline \end{array}$$

$$\begin{array}{r} 11 \\ \times 12 \\ \hline \end{array} \quad \begin{array}{r} 9 \\ \times 11 \\ \hline \end{array} \quad \begin{array}{r} 8 \\ \times 3 \\ \hline \end{array} \quad \begin{array}{r} 10 \\ \times 3 \\ \hline \end{array} \quad \begin{array}{r} 7 \\ \times 12 \\ \hline \end{array} \quad \begin{array}{r} 3 \\ \times 7 \\ \hline \end{array} \quad \begin{array}{r} 5 \\ \times 10 \\ \hline \end{array} \quad \begin{array}{r} 12 \\ \times 6 \\ \hline \end{array} \quad \begin{array}{r} 7 \\ \times 6 \\ \hline \end{array} \quad \begin{array}{r} 11 \\ \times 11 \\ \hline \end{array}$$

$$\begin{array}{r} 12 \\ \times 11 \\ \hline \end{array} \quad \begin{array}{r} 2 \\ \times 6 \\ \hline \end{array} \quad \begin{array}{r} 4 \\ \times 7 \\ \hline \end{array} \quad \begin{array}{r} 7 \\ \times 0 \\ \hline \end{array} \quad \begin{array}{r} 3 \\ \times 8 \\ \hline \end{array} \quad \begin{array}{r} 4 \\ \times 11 \\ \hline \end{array} \quad \begin{array}{r} 9 \\ \times 1 \\ \hline \end{array} \quad \begin{array}{r} 12 \\ \times 4 \\ \hline \end{array} \quad \begin{array}{r} 6 \\ \times 3 \\ \hline \end{array} \quad \begin{array}{r} 10 \\ \times 2 \\ \hline \end{array}$$

$$\begin{array}{r} 3 \\ \times 11 \\ \hline \end{array} \quad \begin{array}{r} 6 \\ \times 0 \\ \hline \end{array} \quad \begin{array}{r} 0 \\ \times 12 \\ \hline \end{array} \quad \begin{array}{r} 11 \\ \times 4 \\ \hline \end{array} \quad \begin{array}{r} 9 \\ \times 7 \\ \hline \end{array} \quad \begin{array}{r} 2 \\ \times 3 \\ \hline \end{array} \quad \begin{array}{r} 1 \\ \times 8 \\ \hline \end{array} \quad \begin{array}{r} 1 \\ \times 11 \\ \hline \end{array} \quad \begin{array}{r} 9 \\ \times 4 \\ \hline \end{array} \quad \begin{array}{r} 12 \\ \times 1 \\ \hline \end{array}$$

$$\begin{array}{r} 6 \\ \times 6 \\ \hline \end{array} \quad \begin{array}{r} 1 \\ \times 1 \\ \hline \end{array} \quad \begin{array}{r} 8 \\ \times 10 \\ \hline \end{array} \quad \begin{array}{r} 3 \\ \times 2 \\ \hline \end{array} \quad \begin{array}{r} 5 \\ \times 5 \\ \hline \end{array} \quad \begin{array}{r} 12 \\ \times 9 \\ \hline \end{array} \quad \begin{array}{r} 9 \\ \times 10 \\ \hline \end{array} \quad \begin{array}{r} 5 \\ \times 2 \\ \hline \end{array} \quad \begin{array}{r} 7 \\ \times 5 \\ \hline \end{array} \quad \begin{array}{r} 4 \\ \times 1 \\ \hline \end{array}$$

Time: _____ minutes Score: _____ out of 50

Name: _____

Multiplication Frenzy

$$\begin{array}{r} 37 \\ \times \quad 1 \\ \hline \end{array}$$

$$\begin{array}{r} 520 \\ \times \quad 69 \\ \hline \end{array}$$

$$\begin{array}{r} 560 \\ \times \quad 97 \\ \hline \end{array}$$

$$\begin{array}{r} 898 \\ \times \quad 9 \\ \hline \end{array}$$

$$\begin{array}{r} 986 \\ \times \quad 7 \\ \hline \end{array}$$

$$\begin{array}{r} 524 \\ \times \quad 4 \\ \hline \end{array}$$

$$\begin{array}{r} 827 \\ \times \quad 90 \\ \hline \end{array}$$

$$\begin{array}{r} 962 \\ \times \quad 9 \\ \hline \end{array}$$

$$\begin{array}{r} 63 \\ \times \quad 4 \\ \hline \end{array}$$

$$\begin{array}{r} \$9.69 \\ \times \quad 5 \\ \hline \end{array}$$

$$\begin{array}{r} \$8.40 \\ \times \quad 6 \\ \hline \end{array}$$

$$\begin{array}{r} \$4.75 \\ \times \quad 50 \\ \hline \end{array}$$

Name: _____ Multiplication: 3-Digits by 2-Digits

a.		5	2	3		b.		1	3	0		c.		4	7	2
	x		1	2			x		4	3			x		4	9
d.		6	9	3		e.		5	0	3		f.		4	9	9
	x		2	5			x		3	0			x		8	1
g.		2	5	6		h.		5	0	0		i.		9	7	8
	x		4	1			x		3	0			x		1	6
j.		2	0	4		k.		6	7	9		l.		6	0	8
	x		8	9			x		7	3			x		3	6

Name: _____

Special Number

The special number is

987,065

The value of the digit 5 is _____.

The value of the digit 7 is _____.

The value of the digit 8 is _____.

The value of the digit 6 is _____.

The value of the digit 9 is _____.

even

odd

Fill in the empty boxes on the number line.



Write the number in expanded form.

_____ + _____ + _____ + _____ + _____

1,000 less than 987,065 is _____.

10 more than 987,065 is _____.

100 less than 987,065 is _____.

1,000 more than 987,065 is _____.

10,000 less than 987,065 is _____.

Compare. <, >, or =

987,650 987,065

897,065 987,065

987,065 987,506

789,650 987,065

Name: _____

Place Value Up to Hundred Thousands

Find the Mystery Numbers

The mystery number has...

- a 4 in the ten thousands place.
- a 5 in the hundred thousands place
- a 3 in the tens place
- a 2 in the ones place
- a 0 in the hundreds place
- a 6 in the thousands place

What is the mystery number? _____

The mystery number has...

- a 1 in the ones place
- a 7 in the hundred thousands place
- a 7 in the tens place
- an 8 in the ten thousands place
- a 9 in the thousands place
- a 2 in the hundreds place

What is the mystery number? _____

The mystery number has...

- a 9 in the ten thousands place
- a 0 in the thousands place
- an 8 in the hundred thousands place
- a 0 in the ones place
- an 8 in the hundreds place
- a 2 in the tens place

What is the mystery number? _____

Rearranging Digits

Rearrange each set of digits to make the largest number possible.

example:

$$\begin{array}{ccc} 053465 & - & \underline{655,430} \\ \text{digits} & & \text{largest number you} \\ & & \text{can make with the digits} \end{array}$$

- a. 281783 _____ b. 009726 _____
c. 912322 _____ d. 145765 _____
e. 789921 _____ f. 606800 _____
g. 983099 _____ h. 123456 _____

Rearrange each set of digits to make the smallest number possible.

example:

$$\begin{array}{ccc} 153465 & - & \underline{134,556} \\ \text{digits} & & \text{smallest number you} \\ & & \text{can make with the digits} \end{array}$$

- i. 292674 _____ j. 132966 _____
k. 989877 _____ l. 354122 _____
m. 918723 _____ n. 456542 _____
o. 143775 _____ p. 567894 _____

Name: _____

Place Value

Really Big Number Match

Match the number on the right with its name on the left.



- | | | |
|---------|---------|--|
| ____ 1. | 1,253 | a. twelve thousand, fifty-three |
| ____ 2. | 12,053 | b. twelve thousand, five hundred thirty |
| ____ 3. | 12,530 | c. one hundred twenty thousand, fifty-three |
| ____ 4. | \$12.53 | d. one thousand, two hundred fifty-three |
| ____ 5. | 125 | e. five hundred, thirty |
| ____ 6. | 120,053 | f. one hundred twenty-five |
| ____ 7. | 125,530 | g. twelve dollars and fifty-three cents |
| ____ 8. | 530 | h. one hundred twenty thousand, five hundred thirty |
| ____ 9. | 120,530 | i. one hundred twenty-five thousand, five hundred thirty |

Name: _____

Secret Code Math

Order of Operations

Decode the numbers.
Then evaluate the expressions.

1	2	3	4	5	6	7	8	9	0
									

a. Code Numbers

$$\text{zigzag} \otimes + \text{teardrop} \div \square$$

Regular Numbers

Answer

$$15 + \underbrace{6 \div 3}_{2}$$

$$15 + 2$$

b. Code Numbers

$$\square - \square \times \odot$$

Regular Numbers

Answer

c. Code Numbers

$$\text{zigzag} \odot \times \odot + \nabla$$

Regular Numbers

Answer

d. Code Numbers

$$\otimes \triangle \div \otimes - \square$$

Regular Numbers

Answer

e. Code Numbers

$$\nabla + \text{right-pointing triangle} \odot \div \text{teardrop}$$

Regular Numbers

Answer

f. Code Numbers

$$\text{hourglass} + \square \times \text{right-pointing triangle}$$

Regular Numbers

Answer

g. Code Numbers

$$\text{right-pointing triangle} \text{hourglass} \div \text{teardrop} + \square \text{zigzag}$$

Regular Numbers

Answer

h. Code Numbers


$$\text{right-pointing triangle} \otimes - \text{zigzag} \triangle \triangle \div \otimes$$

Regular Numbers

Answer

Name: _____

Cat's Favorite Color



Solve each equation. Then solve the riddle by matching the letters to the blank lines at the bottom of the page.

$$\boxed{E} \quad 25 - 10 \div 2 = \underline{\hspace{2cm}}$$

$$\boxed{R} \quad 10 \times 2 + 6 = \underline{\hspace{2cm}}$$

$$\boxed{P} \quad 14 - 2 \times 3 + 2 = \underline{\hspace{2cm}}$$

$$\boxed{L} \quad 7 \times 3 - 9 \times 2 = \underline{\hspace{2cm}}$$

$$\boxed{R} \quad 24 \div 2 - 20 \div 4 = \underline{\hspace{2cm}}$$

$$\boxed{R} \quad 9 + 7 - 3 \times 5 = \underline{\hspace{2cm}}$$

$$\boxed{U} \quad 20 \div 2 + 5 - 6 = \underline{\hspace{2cm}}$$


$$\boxed{P} \quad 6 + 6 + 6 \times 2 = \underline{\hspace{2cm}}$$

What is a cat's favorite color?

$\frac{\quad}{10}$ $\frac{\quad}{9}$ $\frac{\quad}{26}$ $\frac{\quad}{1}$ $\frac{\quad}{7}$ — $\frac{\quad}{24}$ $\frac{\quad}{3}$ $\frac{\quad}{20}$!

Name: _____

The Beach Witch



Solve each equation. Then solve the riddle by matching the letters to the blank lines at the bottom of the page.

A $6 \times (7 - 3) =$ _____

C $7 + (7 \times 3) =$ _____

T $(10 - 8) \times (40 + 10) =$ _____

N $36 - (9 \times 3) =$ _____

I $45 \div 9 - 2 =$ _____

W $(6 \times 5) \div (54 \div 9) =$ _____

A $20 - 6 + (49 \div 7) =$ _____

S $9 + 7 - 3 \times 5 =$ _____

H $(6 \times 7) - (4 \times 8) =$ _____

D $5 \times 5 + (15 - 8) =$ _____

What do you call a witch who lives at the beach?

21

1

24

9

32

—

5

3

100

28

10

Name: _____

Secret Code Math

Order of Operations

Decode the numbers.
Then evaluate the expressions.

1	2	3	4	5	6	7	8	9	0
									

a. Code Numbers

$$(\text{grid} \triangle + \star) \div \text{crossed square}$$

Regular Numbers

Answer

$$\underbrace{(12 + 6)} \div 3$$

$$18 \div 3$$

b. Code Numbers

$$\text{square with dot} \times (\text{circle with dot} - \text{crossed square})$$

Regular Numbers

Answer

c. Code Numbers

$$\text{grid} \hexagon + \text{circle with horizontal line} \times \star$$

Regular Numbers

Answer

d. Code Numbers

$$(\text{grid} \diamond - \text{crossed square}) \div \text{crossed square}$$

Regular Numbers

Answer

e. Code Numbers

$$(\diamond \times \text{crossed square}) - (\text{circle with dot} \times \text{square with dot})$$

Regular Numbers

Answer

f. Code Numbers

$$\text{circle with horizontal line} \text{circle with horizontal line} - \text{circle with dot} \hexagon \div \text{circle with dot}$$

Regular Numbers

Answer

g. Code Numbers

$$(\text{swirl} \times \text{circle with horizontal line}) + (\text{swirl} - \text{circle with dot})$$

Regular Numbers

Answer

h. Code Numbers

$$(\diamond + \text{circle with horizontal line}) \div (\triangle + \text{crossed square})$$

Regular Numbers

Answer

Name: _____

Counting by 8s



1. Count by 8s.

8, 16, 24, _____, _____, _____, _____, _____

2. What is 8 less than 96? _____

3. What is 8 more than 56? _____

4. Subtract 8 from 80. What is the answer? _____

5. What is 8 less than 88? _____

6. Count by 8s. Circle the numbers you say.
Cross out the ones you do not say.

80 36 64 32 72

54 56 48 40 12

7. There are 8 cups. Each cup has 8 paint brushes in it. How many paint brushes in all? _____

8. You have 8 bags of peaches. Each bag has 3 peaches in it. How many peaches do you have altogether? _____

Name: _____

Counting by 7s



1. Count by 7s.

7, 14, 21, _____, _____, _____, _____, _____

2. What is 7 less than 70? _____

3. What is 7 more than 77? _____

4. Subtract 7 from 28. What is the answer? _____

5. What is 7 less than 49? _____

6. Count by 7s. Circle the numbers you say.
Cross out the ones you do not say.

49 7 18 54 56

84 24 70 28 32

7. There are 7 coins. Each coin is worth five cents.
How much money is there in all? _____

8. You have 7 shelves. Each shelf has
9 books on it. How many books do you
have altogether? _____

Name: _____

Counting by 12s



1. Count by 12s.

12, 24, 36, _____, _____, _____, _____, _____

2. What is 12 less than 96? _____

3. What is 12 more than 48? _____

4. Subtract 12 from 144. What is the answer? _____

5. What is 12 less than 120? _____

6. Count by 12s. Circle the numbers you say.
Cross out the ones you do not say.

60 126 72 132 84

108 120 99 56 96

7. A baker makes 12 dozen rolls. How many rolls did she bake? _____

8. You have 9 bags. Each bag has a dozen oranges in it. How many oranges do you have altogether? _____

Name: _____

Ordering Numbers: 6-Digit

Ordering Numbers

Rewrite each list of numbers in order, from least to greatest.

a.

340,034	304,043	340,340	430,040	430,004
---------	---------	---------	---------	---------

b.

609,229	69,929	609,292	690,229	69,292
---------	--------	---------	---------	--------

c.

733,533	735,553	733,353	735,535	735,335
---------	---------	---------	---------	---------

d.

980,001	99,800	988,101	980,010	980,100
---------	--------	---------	---------	---------

❖ In the box below, write five 6-digit numbers. Have a friend rewrite them in order, from least to greatest.

--

Name: _____

Word name & Standard Form

How do you say that big number?

Write the word name for each number below.

example: 23,406 - twenty-three thousand, four hundred six

- a. 23,567 - _____
- b. 652,190 - _____
- c. 130,911 - _____
- d. 965,040 - _____
- e. 400,600 - _____
- f. 56,700 - _____
- g. 200,100 - _____

Now write each word name in standard form.

example: seventy-two thousand, six hundred seven - 72,607

- h. three hundred six thousand, seventeen - _____
- i. nine hundred twenty-two thousand, four - _____
- j. thirty thousand, one hundred twelve - _____
- k. nine hundred sixty thousand, two hundred twenty-two - _____
- l. ten thousand, four hundred - _____
- m. six hundred thousand, six hundred - _____
- n. four hundred nineteen thousand, nine - _____

❖	G	Y	M	❖
Go on a walk around your yard 3 times	Do 52 jumping jacks	Do 10 burpees	Do 25 high knees	Do 25 butt kicks (25 per leg)
Do 10 squats	Do 20 sit ups	Run 3 laps of your yard	Go for a walk around the block with an adult	Jump as high as you can 10 times
Do a somersault	Dance for 2 minutes	FREE SPACE	Time how long you can balance on your LEFT foot	Make arm circles for 50 seconds
Army crawl from one side of a room to the other and back	Time how long you can balance on your RIGHT foot	Do 3 somersaults back to back—start over if you mess up one	Do a cartwheel	Do a wall sit for 2 minutes
Do walking lunges down a hallway in your home and back 3 times	Do 10 star jumps	Hop on your left foot for 1 minute	Hop on your right foot for 1 minute	Do 15 superman's

